

CHAPTER-1

SHAPES AND SPACE

TOPIC-INSIDE AND OUTSIDE

Q.1- Draw a square and write number 5 inside it and 8 outside it.

Ans-  5 8

Q.2- Which number is inside the circle and which number is outside the circle?

 9 3

Ans- The number inside the circle is – 9


The number outside the circle is – 3

CHAPTER-1

TOPIC-BIG AND SMALL

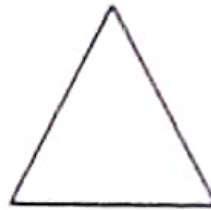

Q.3- Colour the smaller shape.

Ans-



Q.4- Colour the bigger shape.

Ans-

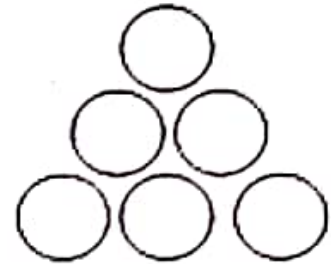
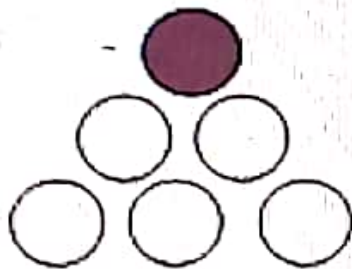


CHAPTER-1

TOPIC-TOP AND BOTTOM

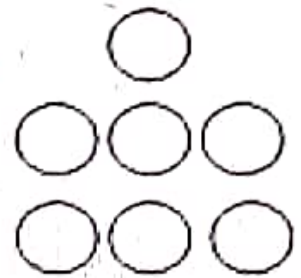
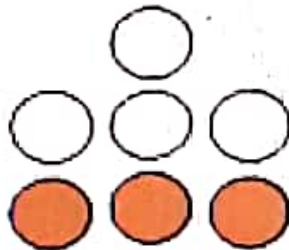
Q.5- Colour the circle at the top.

Ans-



Q.6- Colour all the circles at the bottom.

Ans-



Q.7- Circle the star at the top and put a square at the bottom around each star.

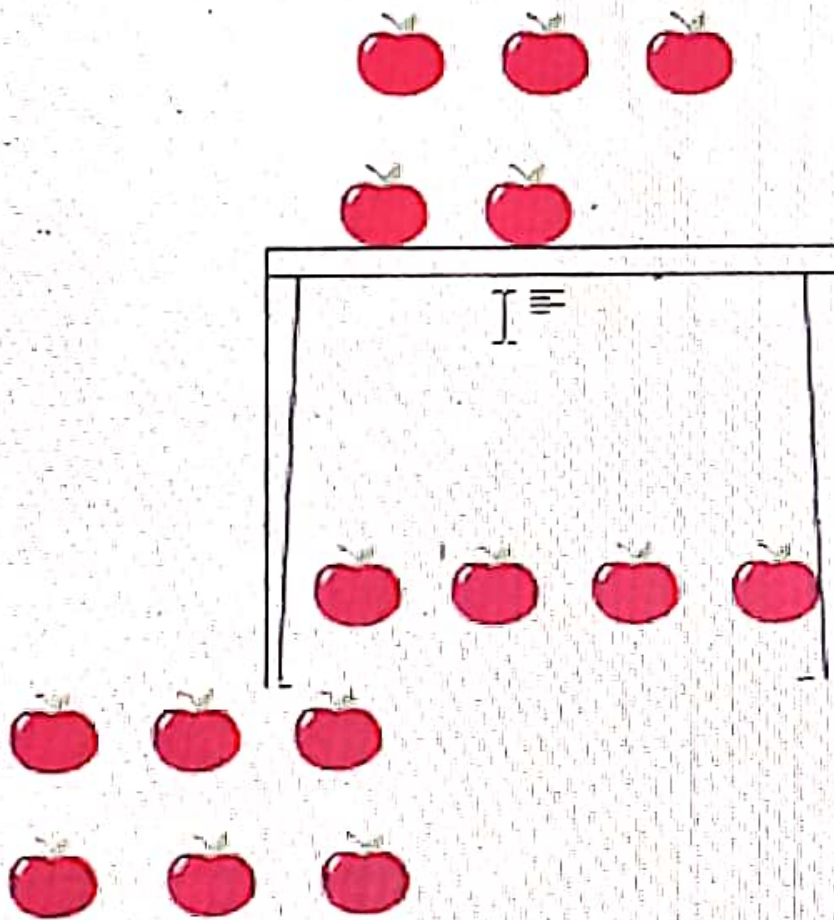
Ans- ☆ ☆



CHAPTER -1

TOPIC-ON AND UNDER

ABOVE AND BELOW



Q.8- How many apples are on the table in the given picture?

Ans- 2 Apples.

Q.9- How many apples are under the table in the given picture?

Ans- 4 Apples.

Q.10- How many apples are above the table in the given picture?

Ans- 3 Apples

Q.11- How many apples are below the table in the given picture?

Ans- 6 Apples